

1 times table

Name: _____

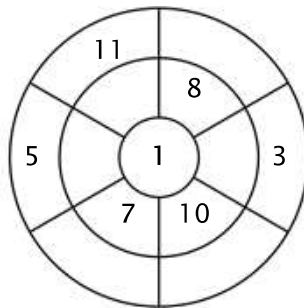
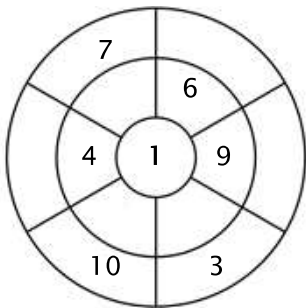
Exercise 1:

Color in all of the boxes that are the solutions of this time table.

49	9	1	7	45
17	25	6	15	12
11	6	22	8	28
50	11	12	5	10
21	7	4	4	5

Exercise 2:

Complete the circle by multiplying the number in the center by the middle ring to get the outer numbers.



Exercise 3:

Fill in the correct product.

a) $1 \times 1 = \underline{\quad}$

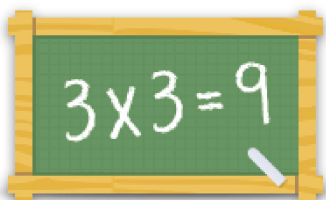
b) $1 \times 3 = \underline{\quad}$

c) $1 \times 9 = \underline{\quad}$

d) $1 \times 8 = \underline{\quad}$

e) $1 \times 6 = \underline{\quad}$

f) $1 \times 2 = \underline{\quad}$



For more worksheets, games and exercises:
www.timestables.com